

The City School

Unified Midyear Examinations 2018-19



SCHOOL
NAME

INDEX
NUMBER

--	--	--	--	--

GEOGRAPHY
CLASS 6

December 2018
1 hour 30 minutes

READ THESE INSTRUCTIONS FIRST

- ❖ Write your School name and Index number in the spaces provided above.
- ❖ Carefully read and follow the instructions given for each Question.
- ❖ Answer all questions.
- ❖ Write your answers in the provided spaces **only**. **DO NOT** write outside the provided space.
- ❖ Select only one answer when made to choose, otherwise no mark will be given.
- ❖ Check your answers before you return the Question Paper to the invigilator.
- ❖ Marks for each section are shown below.

----- For Examiner's use only -----

Questions	1	2	3	4	5	Total
Max. Marks	10	10	10	10	10	50
Marks Obtained						

Percentage		Grade	
------------	--	-------	--

Invigilated by: _____ Marked by: _____ Rechecked by: _____

Q.1 Maps, graphs and photographs are very useful to us. Today they are used by different people for different useful purposes. [10]

a(i) Following are different types of maps. Label them and write one use of each. [3]



Fig 1.1

Label: _____ Use: _____

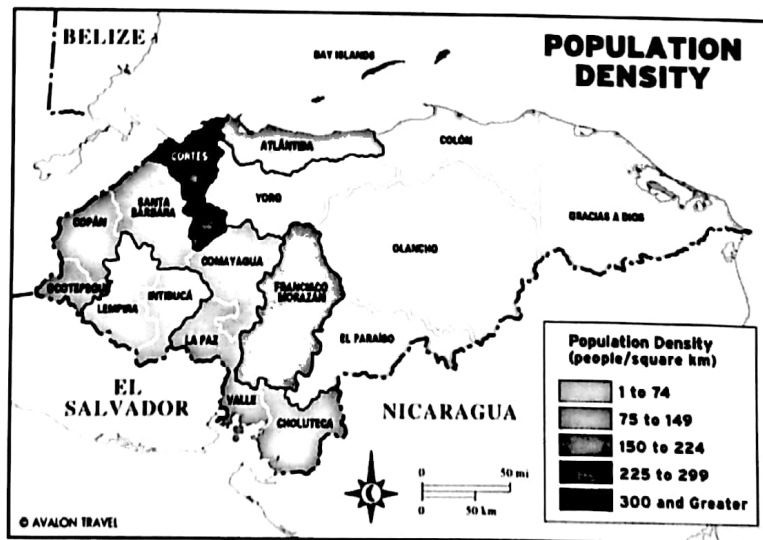


Fig 1.2

Label: _____ Use: _____

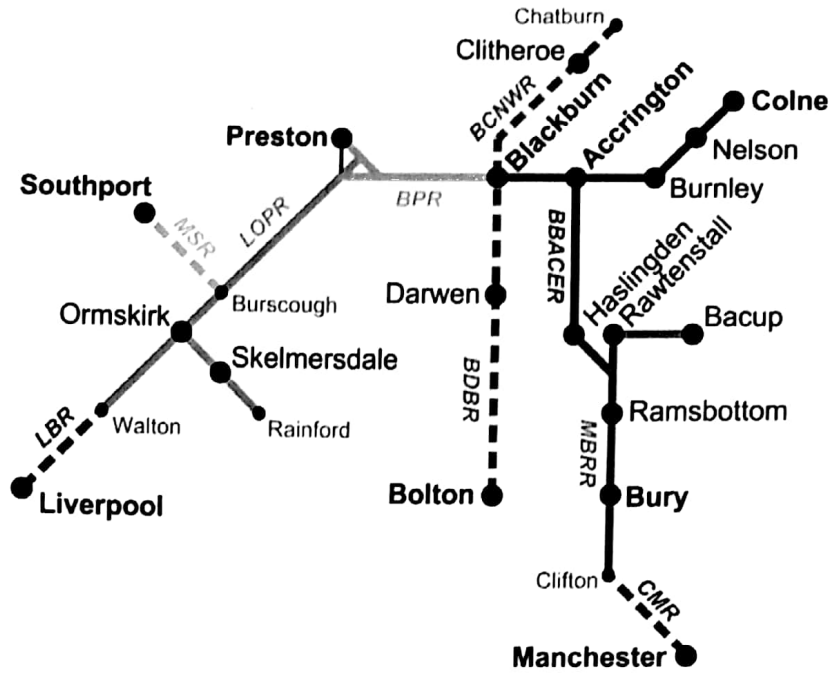


Fig 1.3

Label: _____ Use: _____

a(ii) If a map shows natural features what information could we get from it? [/1]

b(i) Differentiate between the two diagrams by labelling them. [/1]

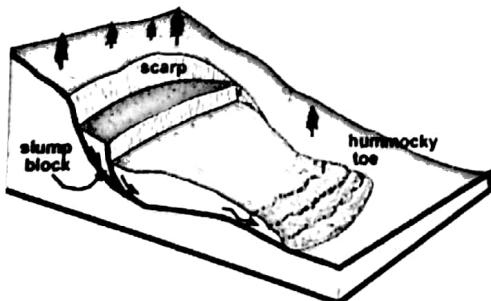


Fig 1.4



Fig 1.5

Fig 1.4 _____


Fig 1.5 _____

b(ii) What type of graph is most suitable to show: [/1]

Rainfall _____

Temperature _____

C Study the given photograph and describe the scene according to the instructions. [/4]



Photograph A

Background: _____

Foreground: _____

Q.2 Answer the following questions. [10]

a(i) State the meaning of the term 'Atmosphere.' [/1]

a(ii) Why is most of the atmosphere close to the ground? [/1]

a(iii) Which part of the atmosphere absorbs the UV rays? [/0.5]

a(iv) Why is the earth not heated uniformly by solar radiation? [/0.5]

b(i) How is the troposphere and stratosphere different from each other? [/4]

b(ii) What is the greenhouse effect? [/1]

c State two reasons why the atmosphere is important to land and people. [/2]

Q.3 With reference to landforms, answer the following questions. [10]

a(i) Study the map of South Asia. Label four countries numbered from 1 to 4 on the given map. [2]

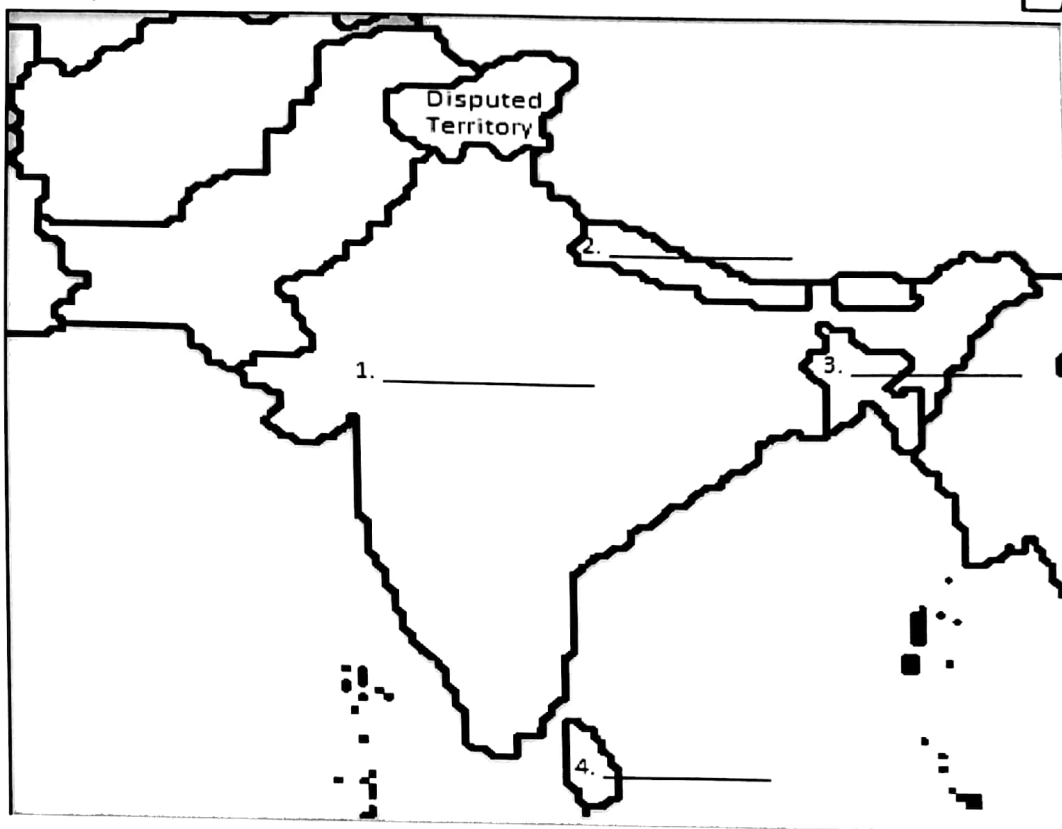


Fig 3.1

a(ii) Name the rivers which have formed plains in South Asia. [2]

a(iii) Name one plateau in Pakistan and India each. [1]

Plateau in Pakistan: _____

Plateau in India: _____

b Study the diagram given below which shows the stages of formation of a physical feature. [/1]

Name the feature _____

Example of a feature _____

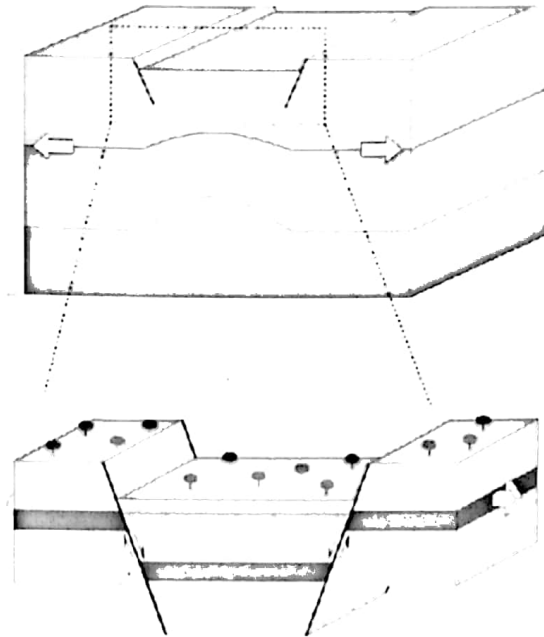


Fig 3.2

c(i) How is the landform named in b(i) formed. [/1]

c(ii) Explain how weathering works to bring changes in the landscape by the: [/3]
alternate heating cooling of rocks.

alternate freezing and thawing of water in cracks

Q.4 Environment is made up of natural features which may be altered by humans. [10]

a Explain the reasons why humans need to change the natural environment to human environment. [/4]

b Explore the negative impact of the change of natural environment to human environment. [/3]

- c The picture below shows the natural environment. Write any three ways how the economy of a country gets benefits from changing the natural environment to human environment. [/3]



Photograph B

Q.5 With reference to the industries, answer the following questions. [10]

- a(i) State the meaning of the following terms 'manufacturing and service industries'. [/2]


Manufacturing industry

Service industry

- a(ii) A barber serves the people living in a village in Sindh. Name two other professions in the village who provide services there. [/1]

a(iii) There are many differences between industries. Write down four ways in which they are different to each other. [/2]

b(i) Photograph C shows some of the tallest residential buildings in Singapore.



Photograph C

If you were living in one of these buildings, what services would you likely receive there? Name any two. [/1]

c(i) Like agriculture, industries also operate as a system. Imagine that you were a potter in some village in Pakistan; tell what you would need in terms of: [/2]

Input (Write any one)	Process	output	Market (Who will buy your goods)

c(ii) What would happen if the input you have mentioned in **c(i)** is removed from the system? [/1]

c(iii) Why do small workshop owners obtain the raw material locally or from the nearest market? [/1]
