

The City School

Unified End of Year Examinations 2017-18



SCHOOL
NAME

INDEX
NUMBER

--	--	--	--	--

GEOGRAPHY
CLASS 6

May 2018
1 hour 30 minutes

READ THESE INSTRUCTIONS FIRST

Write your School name and Index number in the spaces provided above.

Carefully read and follow the instructions given for each Question.

Answer **all** questions.

Write your answers in the provided spaces **only**. **DO NOT** write outside the provided space.

Select only one answer when made to choose, otherwise no mark will be given.

Check your answers before you return the Question Paper to the invigilator.

Marks for each section are shown below.

----- For Examiner's use only -----

	Section A: Objective (25)					Section B: Subjective (25)					Total
Questions	1	2	3	4	5	6	7	8	9	10	
Max. Marks	05	05	05	05	05	05	05	05	05	05	50
Marks Obtained											

Percentage		Grade	
------------	--	-------	--

INVIGILATED BY

MARKED BY

MARKS TALLIED BY

Section A: Objective	Total Marks 25
-----------------------------	-----------------------

Q.1 'There is a direct relationship between economic growth and infrastructure facilities in any country.' [5]

a. Why is physical infrastructure connectivity important? [1]

b. Why is the railway called the 'life line of Pakistan'? [1]

c. Name two sea ports of Karachi. [2]

d. Name the coast where Gwadar Port is located. [1]

Q.2. Study Fig 1 (rainfall graph) carefully and answer the questions.

[5]

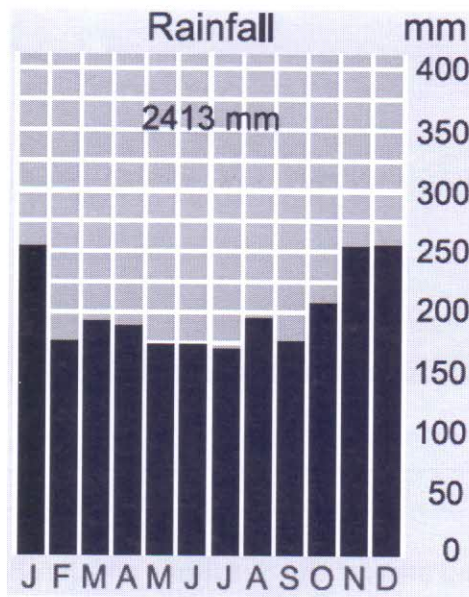



Fig 1

a. Describe two features of the distribution of rainfall in this graph. [/2]

b. Name the vegetation (forest) type which grows in a climate shown in Fig 1. [/1]

c. Why is the forest type named in 2b dense? [/1]

- d. Identify the type of vegetation (forest type). Name a tree which grows in this area. []/1]



- Q.3 Study Fig 2 carefully and answer the questions which follow. [5]

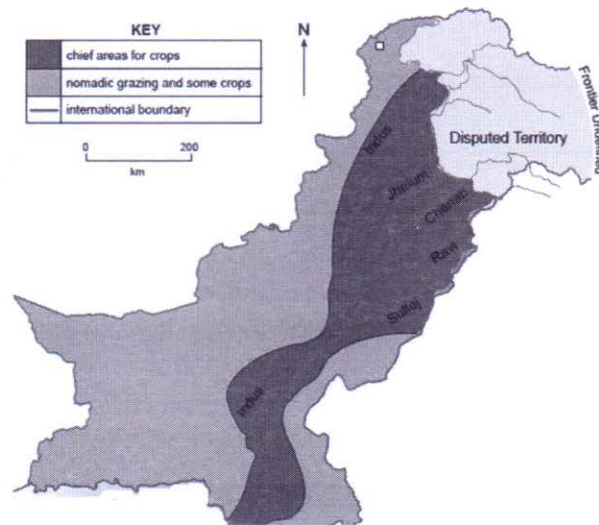


Fig 2

- a. Why are the chief areas of crops concentrated along the rivers? []/1]

b. Study Fig 3 carefully.

Pie Chart A shows that about 33% of the world's total population is in China and India.

Pie Chart B shows that China and India occupy only 8% of the world's total land area.


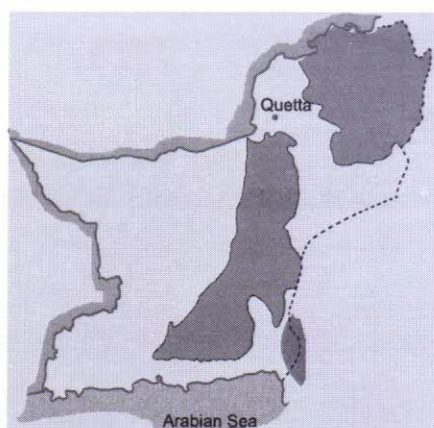


Fig 3

Why is it important for China and India to protect the soil?

[/2]

c. The map Fig 4 shows areas of nomadic herding in Balochistan.



Areas of nomadic herding

Fig 4

What is nomadic herding?

[/2]

Q.4 Answer the following questions.

[5]

a. Give reasons for the following.

[/3]

i. Most of the children in katchi abadis become prone to diseases

ii. An urban settlement in Pakistan is described as urban because

iii. Settlements in plantations are nucleated because

b. Fig 5 shows the road patterns in City A and City B.

[2]

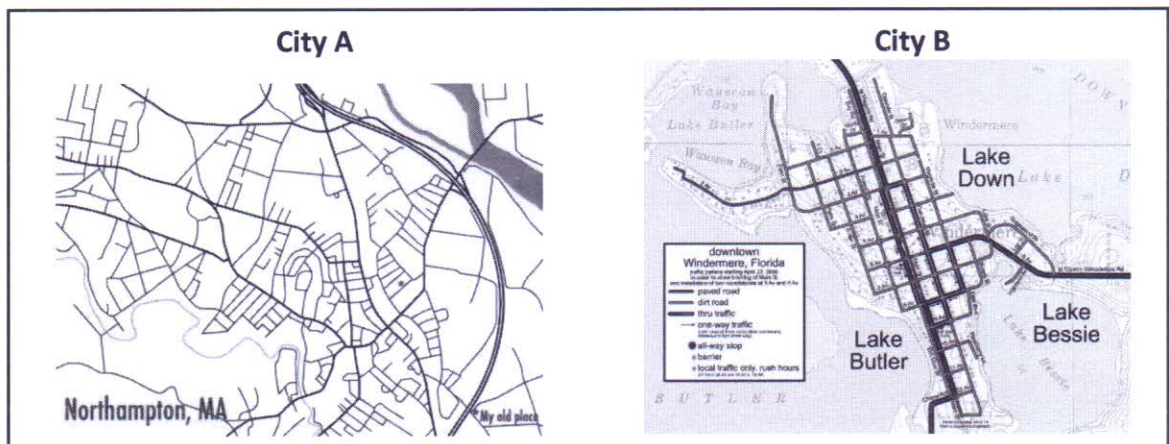


Fig 5

i. Which city is planned?

[/1]

ii. How can you tell?

[/1]

Q.5 Pakistan is in the grip of an energy crisis that is affecting all sectors of the economy and various segments of society. [5]

a. Why is it important to use energy wisely? [2]

b. Write any three ways of saving energy. [3]

Section B: Subjective	Total Marks 25
-----------------------	----------------

Q.6 A country's economic development is dependent upon an efficient network of infrastructure.

a. Describe the physical infrastructure of Pakistan with reference to: [/5]

i. Roads

ii. Airways

Q.7 It is very important to conserve the natural vegetation because of the serious consequences of its destruction.

Explain its consequences on soil. How is it a problem in areas of nomadic herding?

[/5]
