

**Section A: Objective**

**Total Marks 25**

**Q.1** 'There is a direct relationship between economic growth and infrastructure facilities in any country.' [5]

a. Why is physical infrastructure connectivity important? [1]

---

---

b. Why is the railway called the 'life line of Pakistan'? [1]

---

---

c. Name two sea ports of Karachi. [2]

---

---

d. Name the coast where Gwadar Port is located. [1]

---

Q.2. Study Fig 1 (rainfall graph) carefully and answer the questions.

[5]

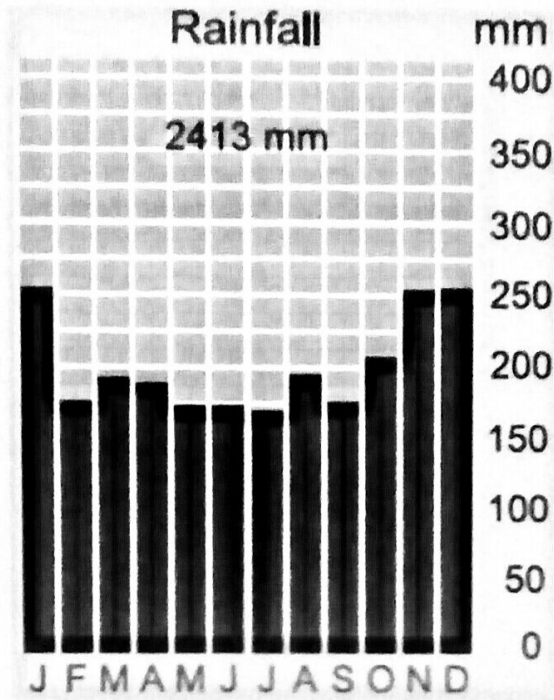


Fig 1

a. Describe two features of the distribution of rainfall in this graph.

[2]

---

---

---

---

b. Name the vegetation (forest) type which grows in a climate shown in Fig 1.

[1]

---


c. Why is the forest type named in 2b dense?

[1]

---

---

d. Identify the type of vegetation (forest type). Name a tree which grows in this area. [1]



Q.3 Study Fig 2 carefully and answer the questions which follow.

[5]

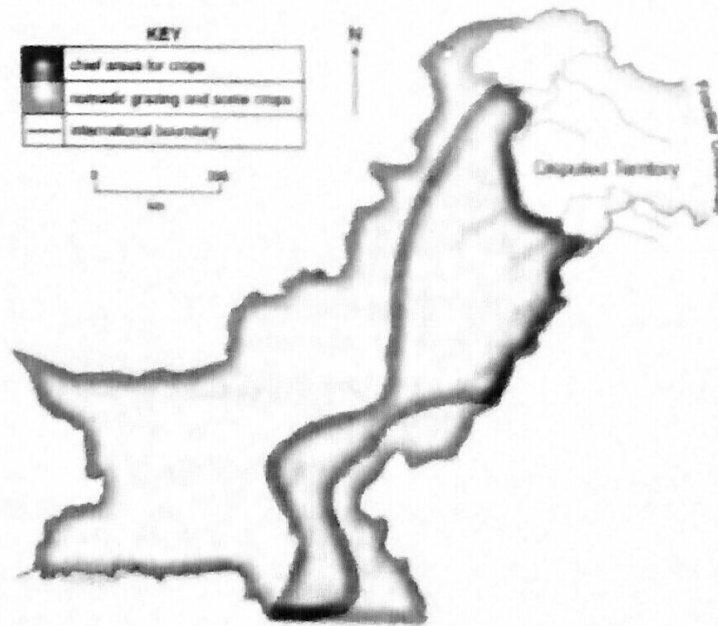


Fig 2

a. Why are the chief areas of crops concentrated along the rivers?

[1]

---

---

b. Study Fig 3 carefully.

Pie Chart A shows that about 33% of the world's total population is in China and India.

Pie Chart B shows that China and India occupy only 8% of the world's total land area.

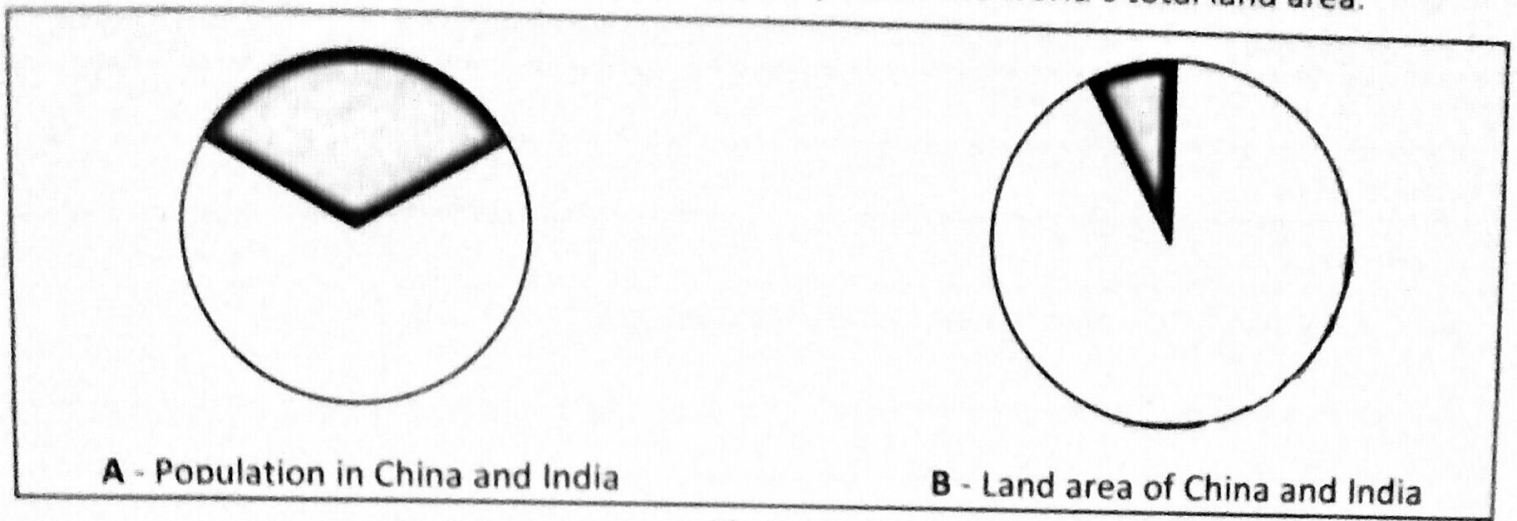
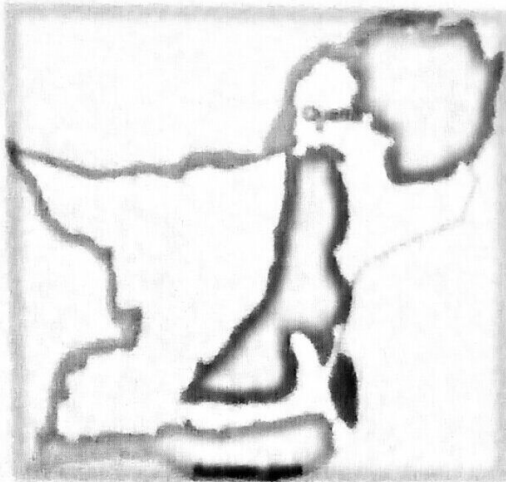


Fig 3

Why is it important for China and India to protect the soil?

[ /2]

c. The map Fig 4 shows areas of nomadic herding in Balochistan.



Areas of nomadic herding

Fig 4

What is nomadic herding?

[ /2]

---

---

---

Q.4 Answer the following questions.

[5]

a. Give reasons for the following.

[3]

i. Most of the children in katchi abadis become prone to diseases

---

---

---

ii. An urban settlement in Pakistan is described as urban because

---

---

---

iii. Settlements in plantations are nucleated because

---

---

---

b. Fig 5 shows the road patterns in City A and City B.

[2]

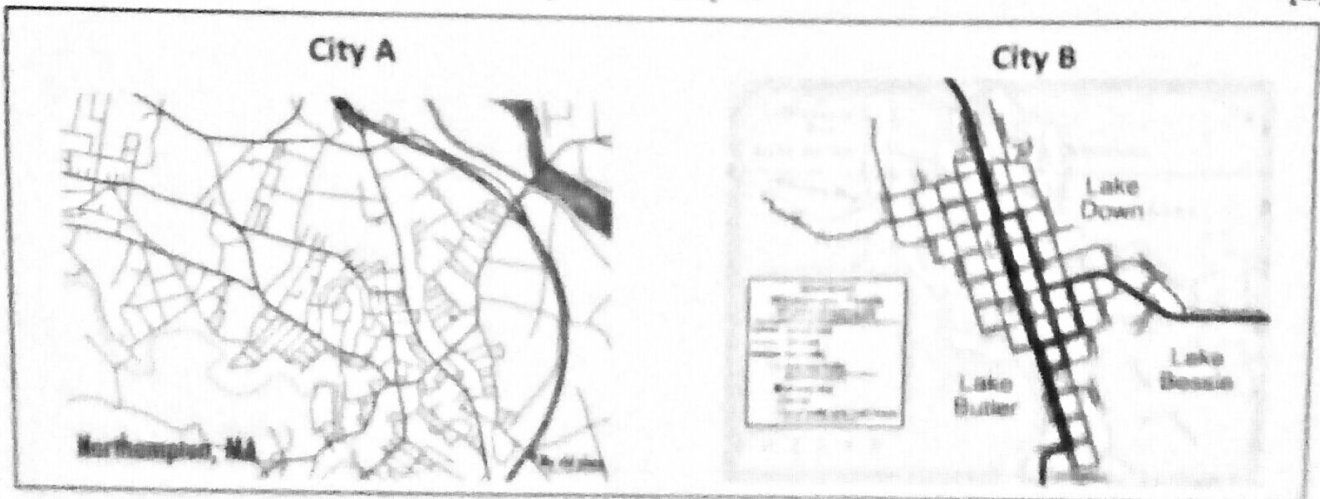


Fig 5

i. Which city is planned?

[1]

---

ii. How can you tell?

[1]

---

**Q.5** Pakistan is in the grip of an energy crisis that is affecting all sectors of the economy and various segments of society.

[5]

a. Why is it important to use energy wisely?

[2]

---

---

---

---

b. Write any three ways of saving energy.

[3]

---

---

---

---

---

---

**Q.6** A country's economic development is dependent upon an efficient network infrastructure.

**a.** Describe the physical infrastructure of Pakistan with reference to:

[ / ]

**i.** Roads

---

---

---

---

---

---

---

---

**ii.** Airways

---

---

---

---

---

---

---

---

**Q.7** It is very important to conserve the natural vegetation because of the serious consequences of its destruction.

Explain its consequences on soil. How is it a problem in areas of nomadic herding?

[ / 5 ]

---

---

---

---

---

---

Name the tribes who practice shifting cultivation. Describe the method of shifting cultivation in either Malaysia or Brazil. [ /5]





