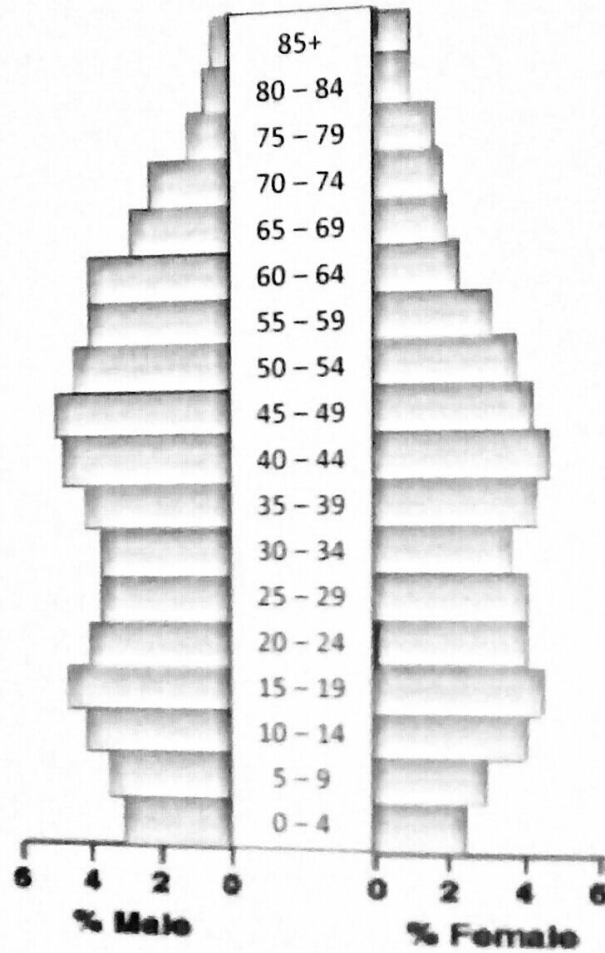


Q.1 Study the population graphs A and B and answer the questions which follow.

[5]



Population in Millions

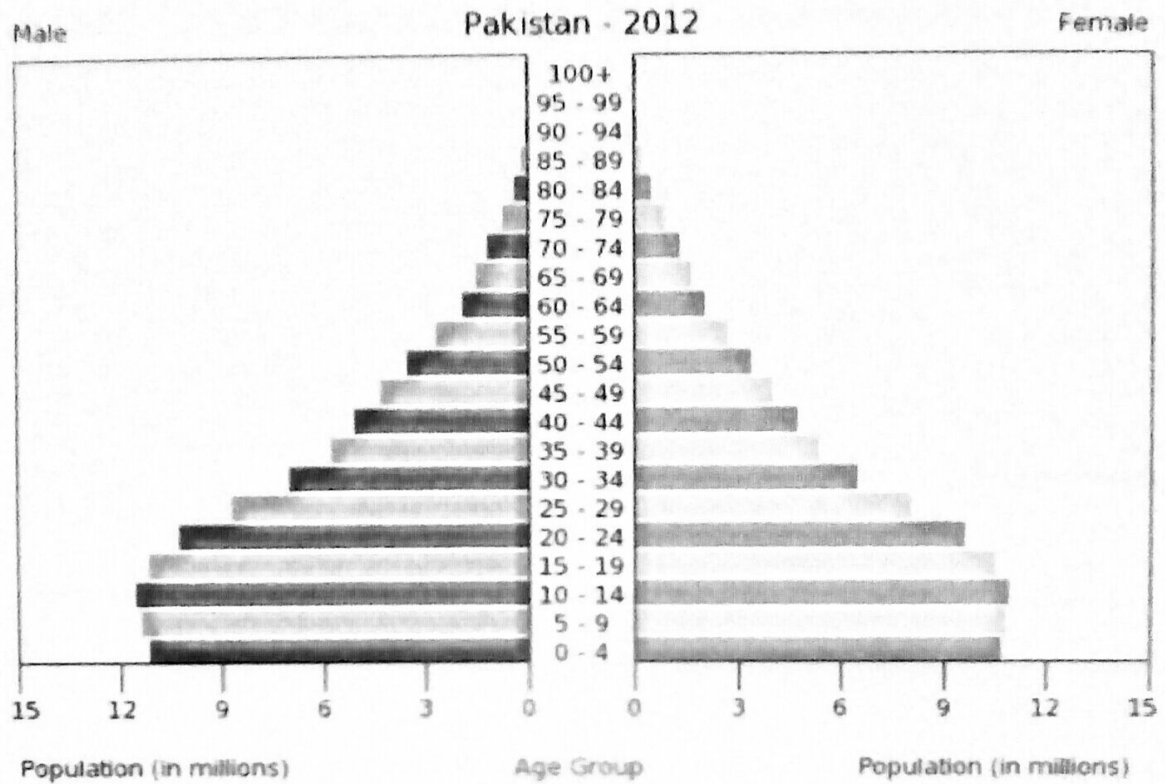
Graph A

a. What are the three major features of this graph?

[3]

b. Suggest two ways in which Graph A is different from Graph B?

[/2]



Graph B

Q.2 Pakistan depends heavily on agriculture for its exports.

[5]

a. List two trade partners of Pakistan.

[/1]

b. Name two chief agricultural products of Pakistan.

[/1]

c. Give one reason why MMF is mixed into cotton?

[/1]

d. Give two reasons why the export of Pakistani rice is declining?

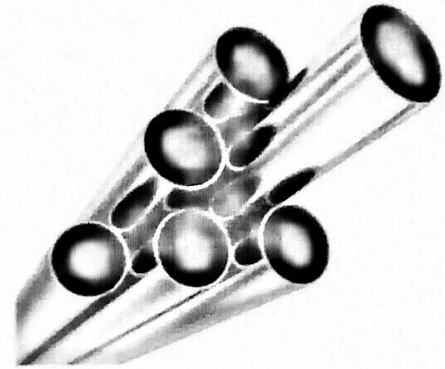
[/2]

Q.3 Look at the pictures given below and answer the question related to them. [5]

a. Name the industrial activity and identify the category of industry associated with each. [4]




A _____



B _____

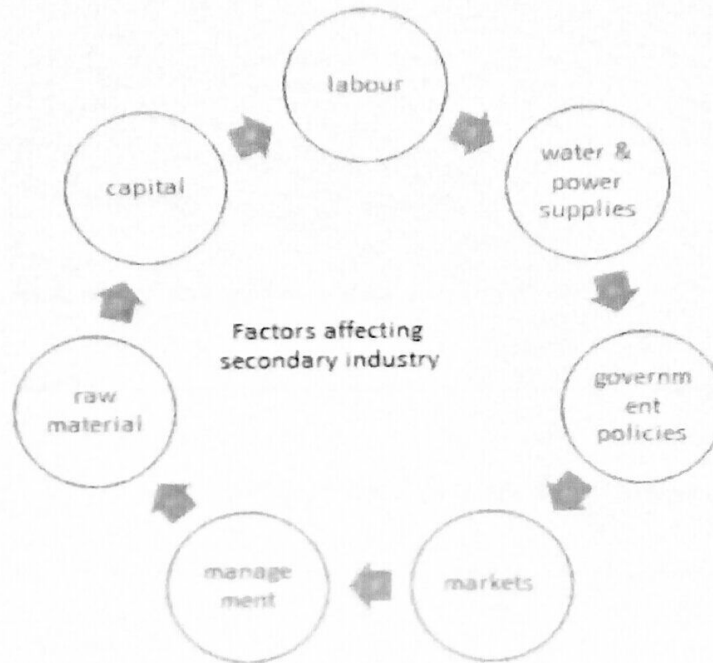


C _____



D _____

- b. If a manufacturing industry has a power breakdown which lasts for a few days, which of the factors are likely to be affected? Name any two. [1]



Q.4 After setting up of Pakistan Environmental Protection Act, some of the industries were required to close down or move elsewhere because of polluting the environment. [5]

- a. What type of pollution is associated with the following industries? [1]

Industries	Type of Pollution
Shoe sole maker	
Stone crushing works	

- b. List one natural factor which influences the development of the tourist industry in the Northern Mountains. [0.5]

- c. Name one negative impact of the tourist industry on the environment. [0.5]

- d. Why was a new runway built at Changi Airport, Singapore? [1]

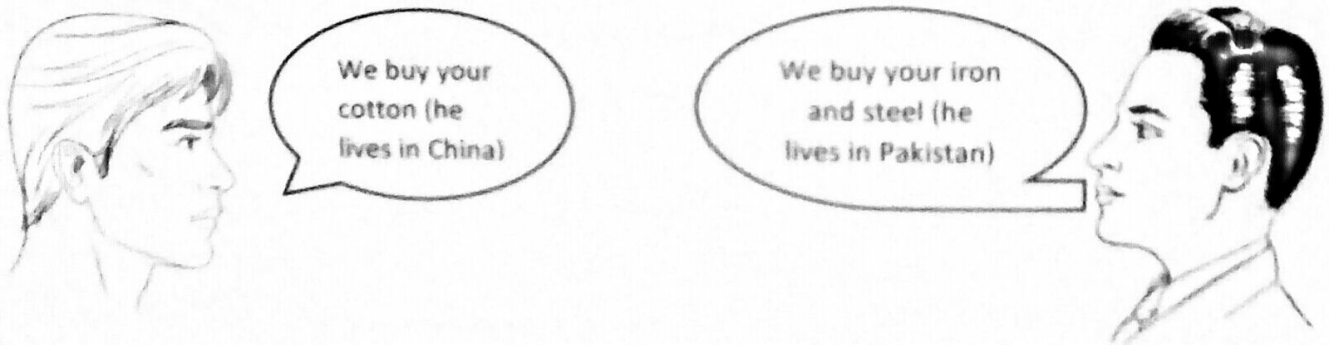
- e. This beach is closed to the tourists. What impact may it have on the environment if opened to tourists? [1]



- f. Name any two health problems caused by pollution. [1]

Q.5 Answer the following questions related to trade. [5]

- a. Study the given figure. Tell what kind of trade is this? [1]



- i. What is China's import? [1]

- ii. What is China's export? [1]

- b. United Arab Emirates buys kinnow from Pakistan. Who is the producer and who are the consumers? [2]

Producer: _____ Consumers: _____

Q.6 Pakistan's agricultural sector faces various problems. [5]

a. Write down **two** problems and their solutions. [4]

Problem	Solution

b. Name **one** country where Pakistan exports wheat every year even if it is not exported to other trade partners. [1]

Q.10 Countries are classified into LEDCs and MEDCs based on certain indicators. [5]

a. List two indicators. [1]

b. Write down one problem each of LEDCs and MEDCs related to population. [2]

c. What does the graph indicate about the changes in Japan's elderly population (65 and above)? [2]

Changes in the Population Pyramid

