



Name: _____ Date: _____ Section: _____

Q) Label the following figure.

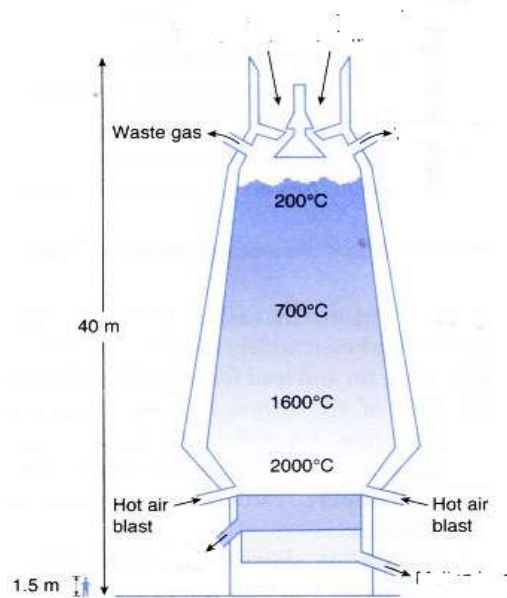


Figure Extraction of iron in a blast furnace

Q) List the raw material used in extraction of iron in blast furnace.

Q) Explain the difference between Coke and Coal.

Q) Discuss the importance of slag.

Q) Why is it necessary to make Pig iron in the blast furnace?

Q) Do you agree that air pollution in Karachi is now probably getting worse than in 1999? If so why? If not, why not?



Q) What do you think should be done to reduce pollution in Pakistan?

Q) In addition to noise and air pollution what type of other pollution do they cause to harm the environment.

Q) Discuss the harmful effect of lead in the blood of children of Pakistan.

Q) Tourism is flourishing in Singapore and Malaysia .Discuss the harmful effect of tourism activities on natural environment.

Q) Building hotels, homes and shopping malls would have major impact on marine environment.

i. Discuss its harmful effect on dolphins and other sea creatures.

ii. Steps taken by the government of Dubai in preserving the marine environment.



Q) Dubai is focusing more on developing its coastal area for tourism. Give reasons.

Q) What is the advantage of islands in the shape of palms?

INDUSTRIES

Q1) Fill in the blanks.

1. _____ of Pakistan's electricity is produced in Pakistan's nuclear plants.
2. The nuclear power plant at Chasma came into operation in _____.
3. The salt range in Pakistan is at _____.
4. The salt produced is _____ pure.
5. The buffaloes dung is dried in sun and sold to farmers for _____.

Q) How many types of industries are there? Discuss main features of Secondary industry.

Q) What are the processes involved in industrial system?



Q) Describe the industrial process involved in Dairy farming of Pakistan.

Q) Discuss the factors which influence the growth of Dairy farming in Pakistan.

Q) What are extractive industries? Explain the work of any one extractive product in Pakistan.

Q) Describe the process involved in small-scale engineering system.



Q) Does government policies have impact on the growth of small scale industries? Give your opinion with reason.

Q) How important is each of primary, secondary and tertiary industry in Pakistan?

Q) Write down short answers of the following questions.

a) Who are Pakistan's trading partners? (any 4)

Q) Explain the services provided by tertiary industry.

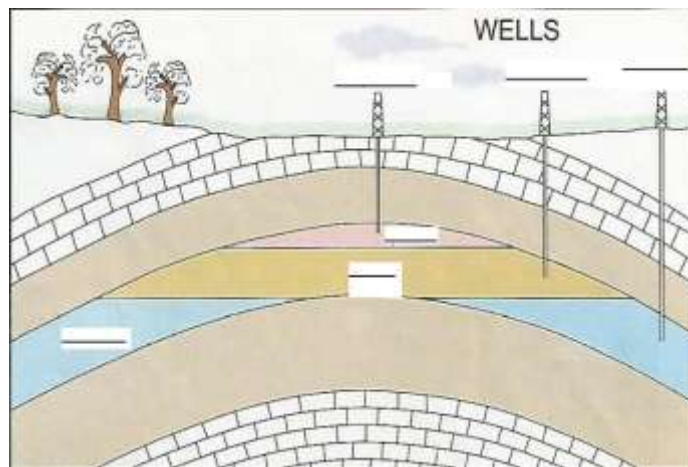


Q) What are the factors that influence the development of industries. Name them.

Q) Name the products obtained from primary industry.

Q) Distinguish between formal and informal sector of industries.

Q) Label the diagram:



Q) What is the influence of dairy farming on the economy of Pakistan?

b) Mention the products obtained from sterling plywood industries.



c) How input/output of manufacturing industry can be improved by Government's aid?

d) Identify the activities taking place in primary industry.

Q) Describe rubber processing on a rubber plantation through a flow chart.

Q) Describe the tea processing on a Tea plantation through a flow chart.

NATURAL GAS AND OIL

Q) Where are the natural gas reserves found in Pakistan?

1. _____
2. _____
3. _____
4. _____

Q) What will be the consequences of shortage of natural gas in Pakistan?

Q) Huge reservoirs are of Natural gas are found in Baluchistan but International companies are not interested in drilling it .Give reasons.



Q) Do you think that that topography of Pakistan supports production of Natural gas .Give your opinion with reason.

Q) Locate and name the areas on the map where the natural gas reserves are found in Pakistan.



Q) Discuss following features of Qatar

i. Topography:

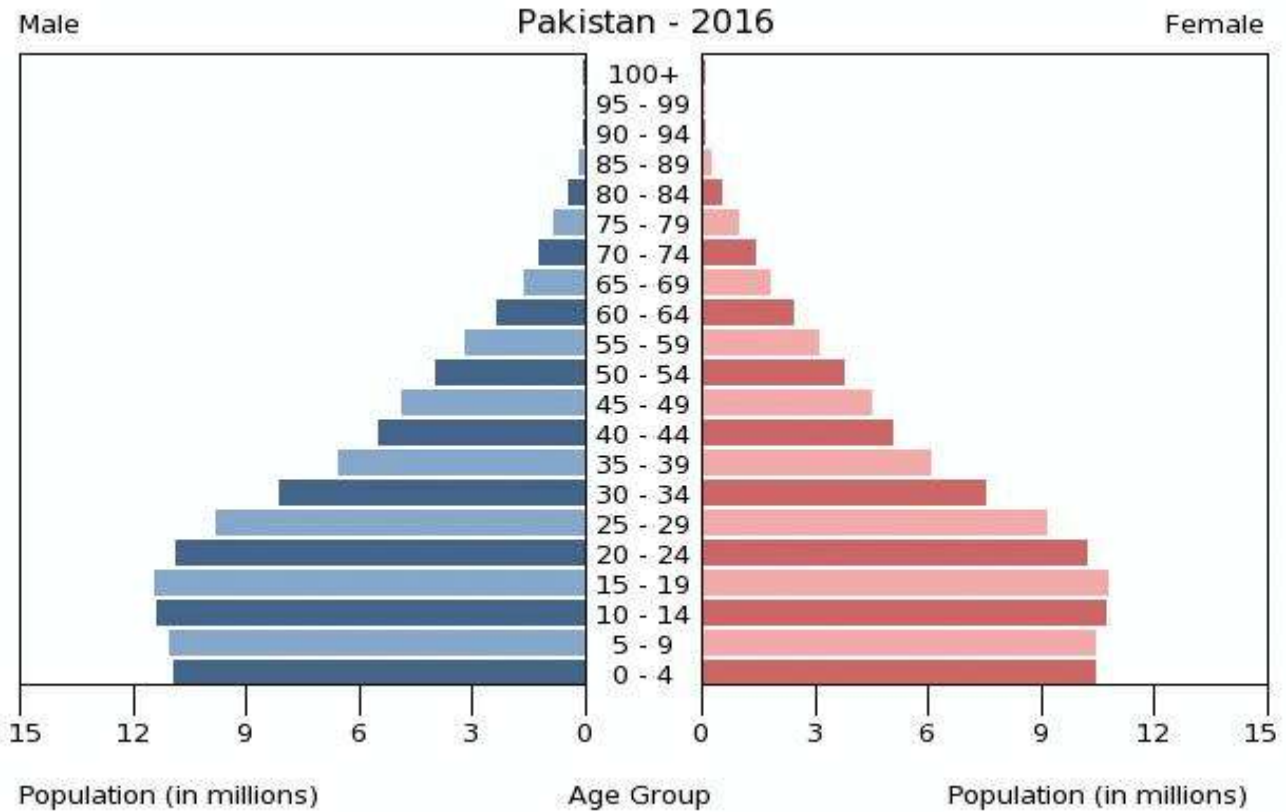
ii. International boundary:

iii. Government:

Q) Explain how does Qatar's Topography supports the production of Oil.



POPULATION



Q) Discuss the main features of the population pyramid.

Q) What are the population issues of MEDC?



Q) What is PPP?

PRIMARY-SECONDARY-TERTIARY INDUSTRIES

Q1) Fill in the blanks:

- 1- In a thermal power plant the force of the _____ turns on the turbine.
- 2- _____ of Pakistan's total electricity is produced at thermal power plants.
- 3- Adults need _____ amount of salt to maintain a normal amount of blood.
- 4- A _____ industry has less than 50 employees.
- 5- _____ Industry is also known as the tertiary industries.
- 6- Tourist industry effects _____ and _____.

Q) Give the full forms of the following:

1. EBP: _____
2. EPZ: _____
3. EPL: _____
4. SITE: _____

Q) State true or false.

1. The bark of the logs is peeled off before the veneers make the attractive finish.
2. Acid is added to the latex in the tanks to make it thin
3. Saudi Arabia Exports the palm oil to Pakistan.
4. The EBM helps exporters to find overseas markets and also help giving advices for production

Q) List the name of services provided by tertiary industry.

Q) In what ways output of tertiary industry is different from Primary and Secondary industries.

Q) Which industry is contributing more in GDP of Pakistan? Discuss the role of tertiary industry in the GDP of Pakistan.

Q) "Tertiary industries benefit people but they also create harmful impact." Discuss.



Q) Identify the industry in the given inserts.



A _____ B _____ C _____

Q) In which type of environment they can be placed; human or natural. Give reasons for your answer.

Q) To what extent do you think these activities influenced the environment?

TERTIARY INDUSTRY

Q) Discuss the factors that are responsible for the growth of Singapore's Tourist industry.



Q) Singapore's tourist industry is more established than Pakistan's industry .Discuss the factors that are hindering the growth of Pakistan's Tourist industry.

Q) Do you think that transport plays vital role in the establishment of Pakistan's Tourist industry? Share your opinion with reason.

Q) What is Remittance?

Q) Explain the importance of remittance in the growth of economy of a country.

Q) Write the names Tertiary industries shown in the following pictures.





TRADE AND TRANSPORT 1

Q) Define trade and its types.

Q) Discuss the importance of transport and communication for Pakistan's trade.

Q) Differentiate between Oil tankers and Container ship.

Q) Explain why is it important to have special facilities for container ship and oil tankers at the dock.

Q) What are multipurpose terminals? How is it different from other types of terminal.



Q) List any five major imports and exports of Pakistan.

Q) What is balance trade? Why is it important for the economy of Pakistan?

Q) Discuss the efforts made by the government of Pakistan for the promotion of exports.

Q) What is transit trade?

Q).Discuss the advantages and disadvantages of transit trade to Pakistan.

Q) What is the purpose of establishing the following associations?

i.ASEAN: _____

ii.ARF: _____

iii.SAARC: _____
