



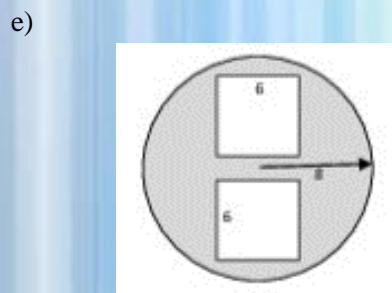
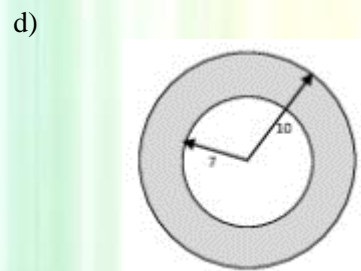
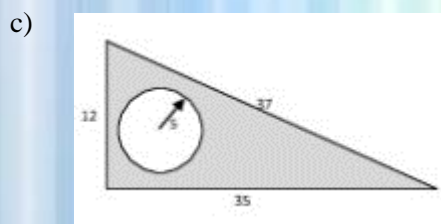
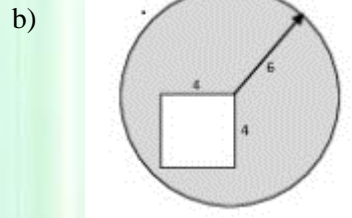
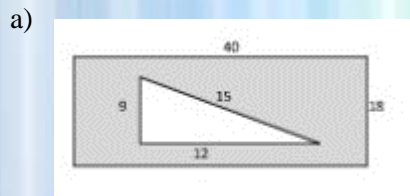
Teacher Name: Ambreen Badar

Class: 7

Subject: Mathematics

Date: November 11, 2016

Q1: Find the area of shaded region in the given shapes:



Q2: Copy and complete the given table:

Radius	Diameter	Area (to 2 d.p.)
4 cm	8 cm	
	12 cm	
		12.56 m <sup>2</sup>
	18 inches	
		1256.00 cm <sup>2</sup>
2.7 cm		
		907.46 mm <sup>2</sup>



# *The City School*

North Nazimabad Boys Campus

E-Worksheet

