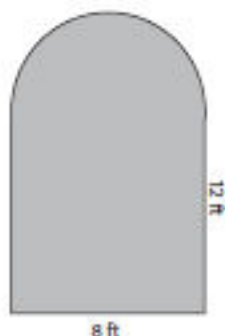


### Area - Compound Shapes

Add: 51

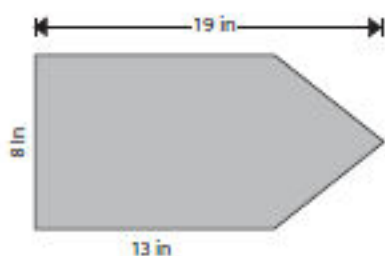
Find the area of each figure. Round the answer to 2 decimal places if necessary.

1)



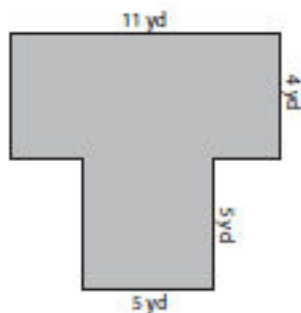
Area = \_\_\_\_\_

2)



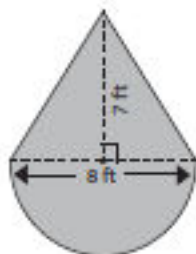
Area = \_\_\_\_\_

3)



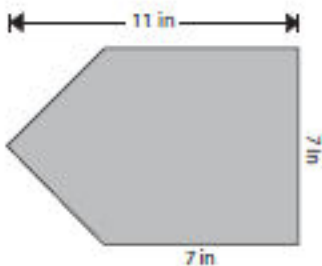
Area = \_\_\_\_\_

4)



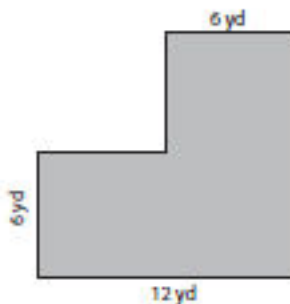
Area = \_\_\_\_\_

5)



Area = \_\_\_\_\_

6)



Area = \_\_\_\_\_