

Name : _____

Score : _____

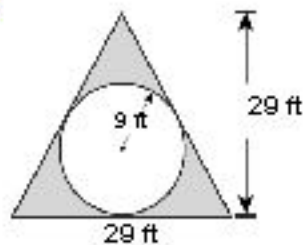
Teacher : _____

Date : _____

Compound Shapes

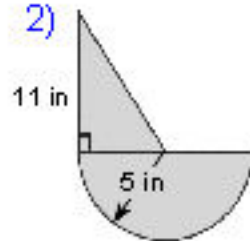
Find the area of each figure, round your answer to one decimal place if necessary.

1)



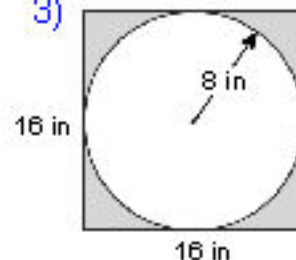
Area: _____

2)



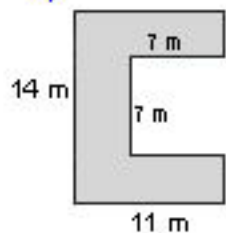
Area: _____

3)



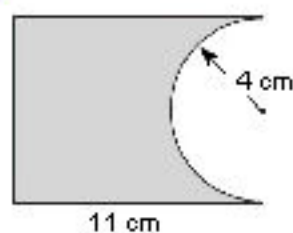
Area: _____

4)



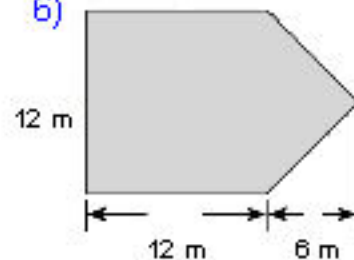
Area: _____

5)



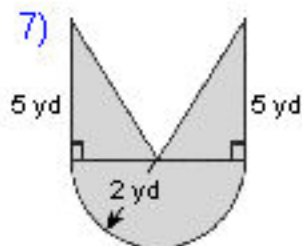
Area: _____

6)



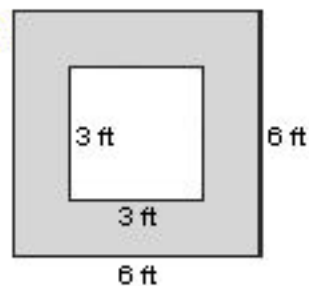
Area: _____

7)



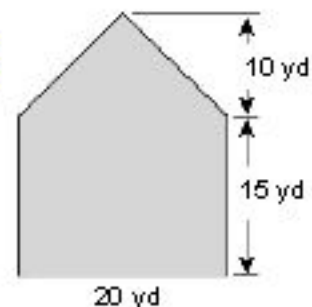
Area: _____

8)



Area: _____

9)



Area: _____